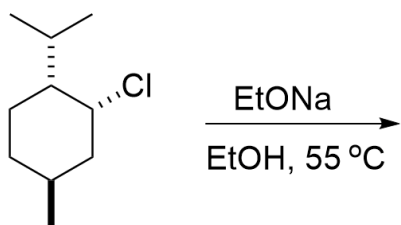
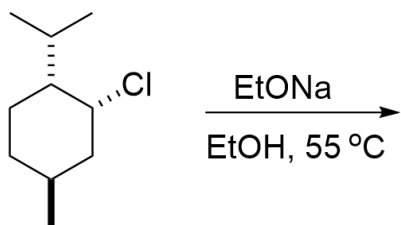
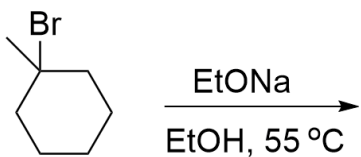
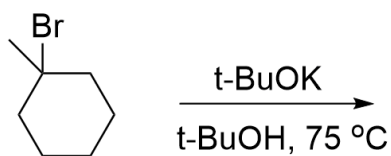
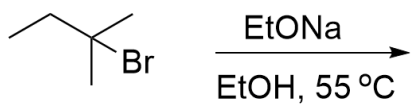
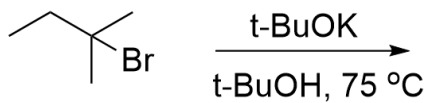
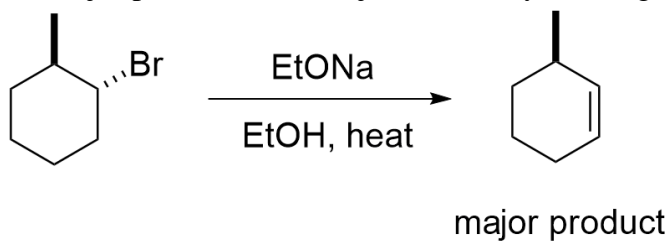


Dehydrohalogenation, Small base vs Bulky base, Antiperiplanar TS

1.



2. Clearly explain why trans-1-bromo-2-methylcyclohexane gives 3-methylcyclohexene as the major product when subjected to dehydrohalogenation.



3. Give the major products of the reactions below.

